

WEST BENGAL SHINE TEACHERS' OF EDUCATION TALENT SEARCH EXAMINATION -2024 CLASS -V

Every CORRECT answer will add one mark
Every WRONG answer will deduct one mark

Time : 1 hr 30 minutes

Full marks : 80

Choose the opposite Gender:

1. Knight :

- a) Madame b) Mademoiselle
c) Dame d) Knightess

2. Fox :

- a) mare b) vixen c) lamb d) foal

Choose the correct prepositions

3. Don't wink _____ your faults.

- a) at b) off c) by d) in

4. The errant driver was let _____ with a warning.

- a) out b) of c) off d) down

5. His brilliant goal is a testimony _____ his talent.

- a) on b) for c) to d) with

Choose the correct alternatives:

6. _____ according to you will become the next president of India?

- a) Who b) Whom c) Whoever d) Which

7. It is _____ who will take the responsibility.

- a) I b) him c) me d) ours

Fill in the blanks with Collective Nouns.

8. A _____ of eagles.

- a) Clan b) Council c) Cabinet d) Convocation

9. A.....bears :

- a) herd b) swarm c) drove d) sloth

10. Identify the adverb in the following sentence:

He is too careless.

- a) Too b) He c) Careless d) Is

11. Which of the following is an "irregular verb"?

- a) Clean b) Open c) Talk d) go

Choose the meanings of the Idioms.

12. Alpha and omega

- a) To initiate b) To plan
c) The beginning and the end d) To avoid

13. A lady's purse is called....

- a) Nubile b) Reticule c) sack d) Wallet

Choose the correct conjunction:

14. Do I say.

- a) which b) that c) as d) like

Choose the synonyms for the given words

15. Sombre

- a) Gloomy b) Quiet c) happy d) angry

16. Sedentary

- a) Rough b) Stationary
c) Affectionate d) Hazardous

Choose the antonyms for the given words.

17. Covert

- a) overt b) Overlook
c) Implement d) Revelation

18. Choose the word with the correct spelling.

- a) Tution b) Tuiton c) Tusion d) Tuition

Identify the kinds of nouns for the underlined words:

19. I can see a father in the kind man.

- a) Common noun b) Abstract noun
c) Proper noun d) Collective noun

20. Kalidas is called the Shakespeare of India.

- a) Common noun b) Abstract noun
c) Proper noun d) Collective noun

21. What is 14-(-4)?

- (a)10 (b)-10 (c)-4 (d)18

22. The boundary of a square garden is 80 m in length. How long is one side of the garden?

- (a)20m (b)40m (c)10m (d)5m

23. If Perimeter = 40 metre then each side of the square will be-

- (a) 10km (b) 10 metre
(c) 40 square cm (d)20metre

24. Rupee5/100 =

- (a) 500 paise (b) 5 paise
(c) 50paise (d)rs.5

25. The cost of a movie ticket is Rs.40.25. Find the cost of 5 tickets.

- (a)200 (b)201.25
(c)205 (d)210

26. One day Shahrukh travelled 20.250km on foot, 17.500km by bus and 12.250km by cycle. Find the total distance he covered on that day.

- (a) 50 km (b) 60 km
(c) 75 km (d) 100 km

27. Write the following numbers as Roman numerals:

- 69
(a) LXIIX (b) LXIX
(c) LXX (d) LXXI

28. Write the following numbers as Roman numerals:

- 229
(a) CCXXIX (b) CCXIX
(c) CCXXI (d) CXXIX

29. Write the following in numbers:
XCIV

- (a) 94 (b) 90
(c) 95 (d) 80

30. Write the following in numbers:
MDCC

- (a) 3300 (b) 1900
(c) 1700 (d) 1800

31. Find the number which exceeds 17319 by 1279

- (a) 18598 (b) 15898
(c) 16000 (d) 16898

32. The sum of two numbers is 94506. One of the number is 49605. Find the other number.

- (a) 44901 (b) 44900
(c) 50000 (d) 50003

33. A car takes 11 hours to cover 770 km. How many hours will it take to cover 350km?

- (a) 5hrs (b) 6hrs.
(c) 7hrs (d) 8hrs

34. The cost of 10 notebooks is 300/-. Find the cost of 5 notebooks.

- (a) 150 (b) 200
(c) 250 (d) 300

35. Find the least number which is exactly divisible by 12, 15 and 20

- (a) 75 (b) 60
(c) 45 (d) 30

36. Find the largest number of 4-digits divisible by 12, 15, 18

- (a) 9990 (b) 9900
(c) 9000 (d) 9009

37. $4/7$ of a number is 84. Find the number.

- (a) 147 (b) 71
(c) 21 (d) 158

38. One half the students in a school are girls. $3/5$ of these girls are studying in lower classes. What fraction of girls are studying in lower class?

- (a) $3/10$ (b) $4/10$
(c) $1/2$ (d) $2/3$

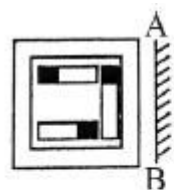
39. I earn Rs. 5.50 per hour. I work 8 hours per day. How much will I earn after 5 days?

- (a) 220 (b) 225
(c) 240 (d) 230

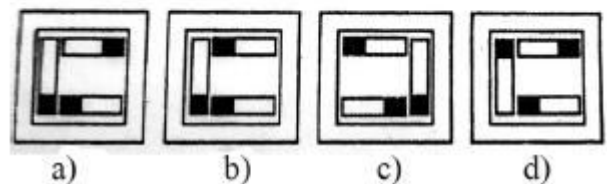
40. Jenny bought 4.35kg of chocolate. She made 10 chocolate cakes. She put 0.35kg of chocolate on each cake. How much chocolate did she have left?

- (a) 0.85kg (b) 3.5 kg
(c) 3 kg (d) 2.5 kg

41. If a mirror is placed on the line AB then, which of the Answer Figure is the right image of the given figure?



Answer figure :



42. BEHK : LORU :: CFIL : ?

- (a) GPSQ (b) MPSV (c) IORU (d) MSPV

43. BDFH : EEII :: PRTV : ?

- (a) SSWW (b) QQUU (c) SUWX (d) QSWU

44. 13 : 170 : 7 : ?

- (a) 64 (b) 70 (c) 90 (d) 50

45. 225 : 104 : 529 : ?

- (a) 408 (b) 419 (c) 429 (d) 400

46. If $14 + 10 = 1405$, $7 + 8 = 565$, then $13 + 11 = ?$

- (a) 1445 (b) 1655 (c) 1435 (d) 103

47. a_vz_av_aa_z

- (a) zzva (b) aazv (c) zvaa (d) avaz

48. ab _ bcbca _ _ c _ bab

- (a) acbc (b) baaa (c) abcc (d) ccaa

49. Complete the series

1, 30 5, 26, 9, 22, 13, 18, ?

- (a) 17 (b) 22 (c) 28 (d) 19

50. Complete the series

4, 18, ?, 100, 180, 294, 448

- (a) 62 (b) 86 (c) 38 (d) 48

51. Complete the series

11,12,15,20,27, ?

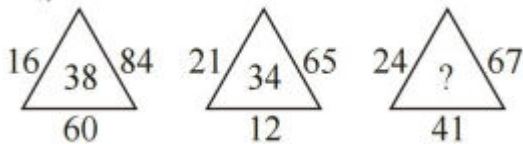
- (a) 36 (b) 35 (c) 38 (d) 41

52. Choose the correct missing number.

34	49	16
52	70	19
54	?	36
35	80	37

- (a) 65 (b) 81 (c) 35 (d) 46

53. Choose the correct missing number.



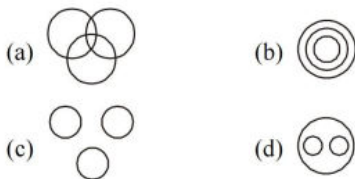
- (a) 56 (b) 54 (c) 53 (d) 64

54. How many triangle in this picture.



- (a) 12 (b) 21 (c) 35 (d) 45

55. Which diagram below shows the correct relationship between Family, Husband and Wife?



56. If $33 + 42 + 23 = 180$, then $43 + 36 + 22 = ?$

- (a) 252 (b) 216 (c) 351 (d) 452

57. Choose the correct option



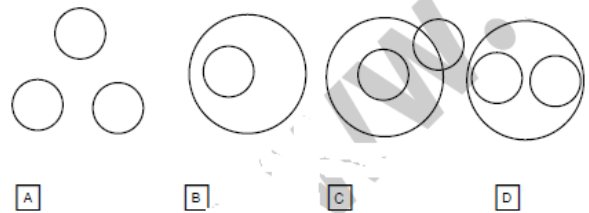
- (a) 54 (b) 64 (c) 74 (d) 84

58. Choose the correct option

5	6	7	8
10	18	21	40
7	9	10	?

- (a) 13 (b) 26 (c) 39 (d) 52

59. Which diagram below shows the relationship between school, teacher and field?



60. If CLAMOR is coded as 246573 and LEAVE is coded as 48698, then CLEVER will be coded as

- a) 248389 b) 248983
c) 423983 d) 249883

61. How many Union Territories are there in India?

- (a) 8 (b) 10 (c) 9 (d) 7

62. Which city is also known as the "Pearl City"?

- (a) Hyderabad (b) Mumbai
(c) Delhi (d) Nagpur

63. The Victoria Memorial is located in which city?

- (a) Mumbai (b) Delhi
(c) Kolkata. (d) Hyderabad

64. Which is the brightest planet in the solar system?

- (a) urenus (b) Pluto
(c) Venus (d) Neptune

65. What is the scientific study of an earthquake called?

- (a) Hydrology (b) Seismology.
(c) Biology (d) Geology

66. Who's the author of the book "Wings of Fire"?

- (a) APJ Abdul Kalam (b) Narashima rao
(c) Indira Gandhi (d) I.K. gujral

67. When is International Mother Language Day celebrated?

- (a) 20 February. (b) 22st February.
(c) 25st February. (d) 21st February.

68. Which is the gas that is filled in balloons?

- (a) Neon (b) Argon
(c) Helium. (d) Oxygen

69. What is the capital of Mizoram?

- (a) Bikaner (b) Kolkata
- (c) Aizawl. (d) Itanagar

70. When is the Hindi Diwas celebrated in India?

- (a) September 12th.
- (b) September 15th.
- (c) September 13th.
- (d) September 14th.

71. What is the capital of Australia?

- (a) Sydney
- (b) Canberra
- (c) Adelaide
- (d) Melbourne

72. Where is Mount Vesuvius located?

- (a) Australia
- (b) Norway
- (c) Italy.
- (d) France

73. Which is the largest state in India in terms of area?

- (a) Uttarakhand (b) Rajasthan
- (c) Uttarpradesh (d) Jharkhand

74. Which is the largest cricket stadium with respect to seating capacity in India?

- (a) Eden Gardens
- (b) Barabati Stadium
- (c) Narendra Modi Stadium.
- (d) Arun Jaitley Stadium

75. Who is known as the "Milkman of India"?

- (a) Verghese Kurien
- (b) B.R Ambedkar
- (c) Narendra Modi
- (d) Swaminathan

76. Who is referred to as the "Light of Asia"?

- (a) Mahabir
- (b) Lord Buddha
- (c) Amarta sen
- (d) Lord Shiva

77. Where does the Brahmaputra River originate from?

- (a) Nepal
- (b) Bhutan
- (c) Tibet.
- (d) Pakistan

78. What acid is secreted in the stomach?

- (a) Hydrochloric acid (b) Mallic Acid
- (c) Nitric Acid (d) Sulphuric Acid

79. What disease is caused due to the deficiency of Vitamin B?

- (a) Rickets
- (b) Night Blindness
- (c) Beriberi
- (d) Plague

80. What is the normal blood pressure limit?

- (a) 110/70 mm Hg
- (b) 70/120 mm Hg
- (c) 110/80 mm Hg
- (d) 120/80 mm Hg