

WEST BENGAL SHINE TEACHERS' OF EDUCATION TALENT SEARCH EXAMINATION -2024 CLASS -IV

Every CORRECT answer will add one mark
Every WRONG answer will deduct one mark

Time : 1 hr 30 minutes

Full marks : 80

Choose the article:

1. Select the option correctly describing the underlined.

Ramesh is my friend. He is very tall.

- a) Preposition b) Adjective
c) Conjunction d) Pronoun

2. Find the odd word.

a) Ladle b) Fork c) Spoon d) Saucer

3. Fill in the blank with the most suitable word.

Pour juice _____ my glass.

a) In b) Into c) Within d) all of these

4. Select the correct choice. Which is the action word?

a) Think b) Mink c) Tank d) Pink

5. Fill in the blank with the correct word.

I love _____ apples but my brother prefers bananas.

a) An b) The c) A d) None of these

6. Select the option indicating the correct parts of speech. Identify the adjective.

a) She b) And c) Great d) Truth

7. CHOOSE THE CORRECT OPTION:

The little blue birds sitting on the branch of the big mango tree made sweet sound in the sunny morning.

The words little blue, big, sweet and sunny are

- a) Adjectives b) Adverbs
c) Nouns d) Conjunctions

8. Select the correct option for the below given question.

The plural of 'hippopotamus' is _____.

- a) Hippopotami b) Hippopotamusses
c) Hippopotamuss d) Hippopotomus

9. Find the odd word out.

- a) Volume b) Shape
c) Weight d) Large

10. The habitat of a dog is called

a) Drey b) Kennel c) sty d) all of these

11. The young one of a deer is called

a) mere b) fawn c) calf d) bull

Choose the prepositions:

12. Idiom 'Criminals are deprived -----their liberty.

a) of b) at c) off d) for

13. He is confined-----bed.

a) by b) in c) of d) to

14. Use collective nouns

A.....of arms

a) bunch b) bale c) box d) stack

15. What's the meaning of the following idiom?

Make Waves

- a) Cause disturb b) Cause happiness
c) wave hands d) wink eyes

16. Find the synonym of the following word

Abate

a) Abet b) reduce c) care d) deal

17. Find the antonym of the following word

Eager

- a) press b) uninterested c) keen d) open

18. Fill in the blank

Theretwo students.

- a) Here b) is c) have d) are

Fill in the blanks with article:

What sort of _____ music is it ?

- a) A b) The c) No article d) An

20. Identify the type of noun of the underlined word.

She was full of happiness.

- a) Common noun b) Proper noun
c) Abstract noun d) Material noun

21. $152 \times \underline{\hspace{2cm}} = 0$

- (a)0 (b)1 (c)4 (d)5

22. $232 \times 1 = \underline{\hspace{2cm}}$

- (a)232 (b)1 (c)0 (d)5

23. $108 \div 9$

- (a)9 (b)15 (c)12 (d)32

24. Neetu brought 15 storybooks to her class.

Today 45 students are present. How many children will need to share one book?

- (a)3 (b)15 (c)45 (d)1

25. The cost of a pair of sunglasses is Rs 595.

What will be the cost of 17 such pairs.

- (a) Rs.10115 (b) Rs.11235
(c) Rs.12345 (d) Rs.0

26. One carton can hold 85 soap bars. Shally wants to pack 340 soap bars. How many cartons does she need for packing all of them?

- (a)4 (b)3 (c)5 (d)9

27. Billo has kept his chickens in a box. He counted 28 legs. How many chickens are there?

- (a)7 (b)14 (c)20 (d)12

28. A packet contains 56 marbles. 10 such packets will contain _____ marbles.

- (a)280 (b)140 (c)70 (d)560

29. $90 \div 6$

- (a)10 (b)20 (c)15 (d)12

30. There are 32 children. $\frac{1}{2}$ of them are girls. How many children are boys?

- (a)30 (b)16 (c)18 (d)20

31. After spending 1.70 rupees out of pocket, Arnav saw that it cost him 1.80 rupees less to buy a box of pencils worth 4 rupees. How much money did he have before?

- (a) 1.30 (b)13 (c)26 (d)130

32. A student instead of adding 14 subtracted 14 and his answer was 32. What is the correct answer?

- (a)60 (b)6 (c)20 (d)23

33. Place the numbers in the spaces marked with star

$$2 \times 3 \times 4 \div * = 2$$

- (a)12 (b)1.2 (c)24 (d)2.4

34. Place the numbers in the spaces marked with star

$$5 \times 9 \div 3 = *$$

- (a)1.5 (b)15 (c)2.5 (d)3

35. Make it Simple

$$861.6 + 67.92 - 85.12 - 679.4$$

- (a)170 (b)165 (c)160 (d)150

36. multiply it

$$.45 \times 100$$

- (a)4.5 (b)45 (c)450 (d).45

37. Find the quotient

$$483.54 \div 15$$

- (a)32236 (b)3.2236 (c) 32.236 (d)322.36

38. Find the quotient

$$42.872 \div 23$$

- (a)1.864 (b)18.64
(c)186.4 (d)1864

39. Which number when multiplied by 15 will be 4.8?

- (a)32 (b)64 (c)16 (d)8

40. Express in millimetres:

7 m. 9 deci.m. 2 mm

- (a)792 m.m (b)790.2 m.m
(c) 7902 m.m (d)79200 m.m

41. If the letters of the word POWERFUL are arranged in the order of the English alphabet, how many letters will remain in the same position even after the arrangement?

- (a) None (b) 1 (c) 2 (d) 3

42. BREAKTHROUGH is written as EAOUHRBRGHKT in a sign language. How is DISTRIBUTION written in that sign language?

- (a) STTIBUDIONRI (b) STTIBUONRID
(c) TISTBUONDRI (d) RISTTIBUDION

43. BROUGHT is written as SGFVAQN in some code language. In that code language How to write SUPREME?

- (a) FNFSRTO (b) DLDSRTO
(c) DLDSTVQ (d) RTOSDLD

44. If 1st December 1994 falls on Thursday, the same date in 1995 shall be—

- (a) Friday (b) Thursday (c) Sunday (d) Saturday

45. Choose the missing number.

81, 27, __, 3, 1

- (a) 15 (b) 9 (c) 6 (d) 12

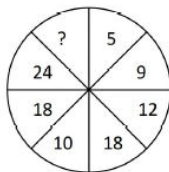
46. Lately you feel like your importance in the family is diminishing. You are in such a situation

- (a) Will pay close attention to family
(b) Be very depressed
(c) Be upset by expressing anger and sadness
(d) Discuss the matter with friends

47. An elderly couple and two couples with two children each entered my room. How many people are in my room?

- (a) 11 (b) 9 (c) 12 (d) 10

48. Choose the missing number.

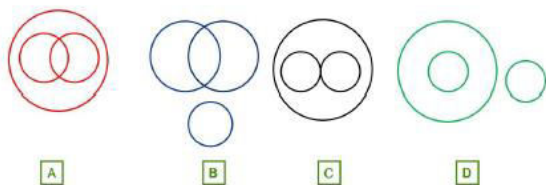


- (a) 30 (b) 25 (c) 36 (d) 34

49. Which of the following words cannot be formed using the letters of the word TRANSFERENCE?

- (a) FRANCE (b) ENTRANCE
(c) FACTOR (d) TENSE

50. Which of the following venn diagrams relate to doctor, lawyer, professional?



51. Arrange the given words in the correct meaningful order:

1. accident, 2. blood donation, 3. hospital, 4. ambulance, 5. bleeding

- (a) 1,5,3,4,2 (b) 1,5,4,2,3
(c) 5,1,4,3,2 (d) 1,5,4,3,2

52. Arrange the following words as they appear in an English dictionary.

1. Chairman 2. Challan
3. Chaos 4. Champion
5. Changing

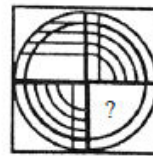
A. 1, 2, 4, 5, 3

B. 1, 4, 2, 3, 5

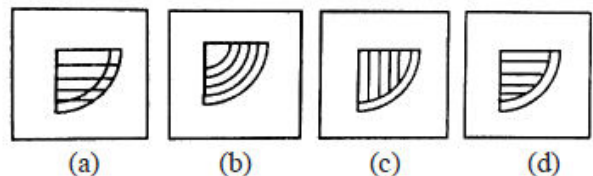
C. 1, 3, 4, 2, 5

D. 1, 2, 3, 4, 5

53. Choose the correct alternative from the given options.

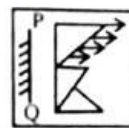


Answer Figures :

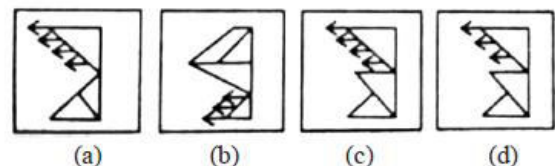


54. A mirror is placed on the line PQ. Which of the Answer Figure is the correct image of the given figures?

Question Figure :



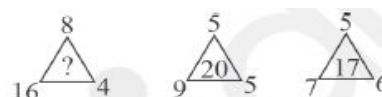
Answer Figures :



Find the odd word from the given responses.

55. a) Book b) Index
c) Glossary d) Chapter

56. Choose the correct alternative from the options.



- a) 4 b) 6 c) 0 d) 1

57. Choose the correct alternative from the options.

3	18	27
14	13	?
34	62	98

- a) 15 b) 25 c) 22 d) 23

58. From the given alternatives select the word which cannot be formed by using the letters of the given word.

ATHARVAVEDA

- a) AREA b) TRADE
c) ASTHA d) HEAD

59. If BLARE is coded as LBRAE, then SUGAR will be coded as –

- a) USAGR b) USGAR
c) SGUAR d) UGSAR

60. How many triangles are there in the following figure?



- a) 19 b) 15
c) 18 d) 20

61. Which is the largest island in the world?

- (a) Victoria (b) New Guinea
(c) Greenland (d) Baffin Island

62. Who wrote the national song Bandemataram ?

- (a) Biharilal Dutta
(b) Rabindranath Tagore
(c) Bankim Ch. Chattopadhyay
(d) Nabin Chandra Sen

63. What is the name of the smallest bone in the human body?

- (a) Stapes (b) Femur
(c) Alna (d) Radius

64. What is cataract a disease of?

- (a) Lungs (b) Eyes. (c) Kidney (d) Brain

65. Which part of the human body cleans the blood?

- (a) Brain (b) Hearts (c) Kidney (d) Lungs

66. Which is the smallest state in India in terms of area?

- (a) Uttarakhand (b) Goa
(c) Punjab (d) Kerala

67. What is the name of the currency of America?

- (a) Dinar (b) Dollar
(c) Crone (d) Indian Rupee

68. Which state of India is called "Land of Rising Sun"?

- (a) Himachal Pradesh (b) Bihar
(c) Arunachal Pradesh (d) Jharkhand

69. Who wrote the "Discovery of India"?

- (a) Ballavbhai Patel (b) Indira Gandhi
(c) Jawaharlal Nehru. (d) Rajiv Gandhi

70. Which state is also referred to as the "Orchid Paradise" in India?

- (a) Arunachal Pradesh (b) Bihar
(c) Kashmir (d) West bengal

71. When is National Girl Child Day celebrated in India?

- (a) 25th January (b) 26 th January
(c) 28 January (d) 24th January

72. On which river bank is Agra situated?

- (a) Yamuna (b) Ganga
(c) Bhagirathi (d) Damodar

73. Which is the most sensitive organ of our body?

- (a) Ear (b) Eye (c) skin (d) Teeth

74. In which year did the Olympic games start?

- (a) 1892 (b) 1896 (c) 1890 (d) 1900

75. Which sport is Dipa Karmakar known for?

- (a) Football (b) Gymnastics
(c) Hockey (d) Table tennis

76. To which sport is the Durand Cup related?

- (a) Football (b) Cricket
(c) Hockey (d) Gymnastics

77. What colour symbolises Peace?

- (a) white (b) Red
(c) Brown (d) Black

78. What is the Gir National Park in Gujarat famous for?

- (a) Elephant (b) Lion.
(c) Tiger (d) Deer

79. What is the full form of "RAM"?

- (a) Ran Access Memory
(b) Random Access Memory.
(c) Random Across Memory
(d) Ran Across Memory

80. What acid is present in an apple?

- (a) Malic Acid. (b) Tartaric Acid
(c) Cytric Acid (d) Folic Acid